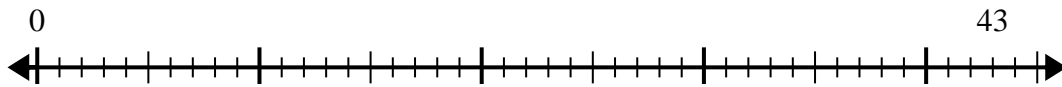


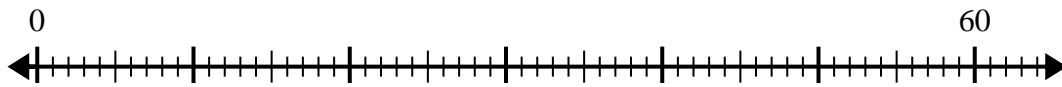


Use the number line to solve the division problem.

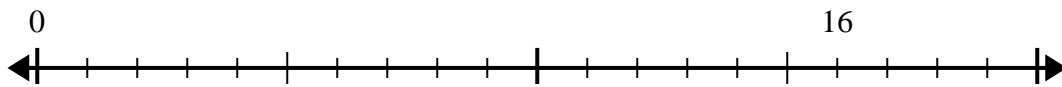
1) $43 \div 5 =$



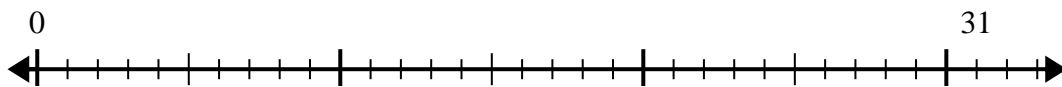
2) $60 \div 7 =$



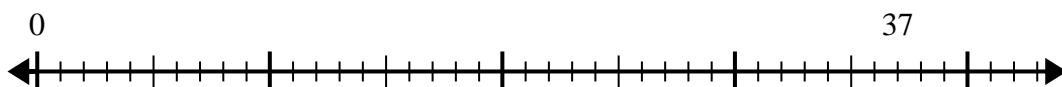
3) $16 \div 5 =$



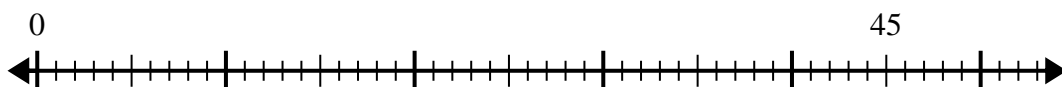
4) $31 \div 4 =$



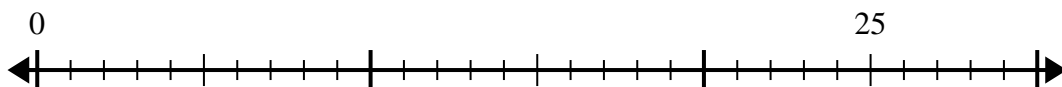
5) $37 \div 7 =$



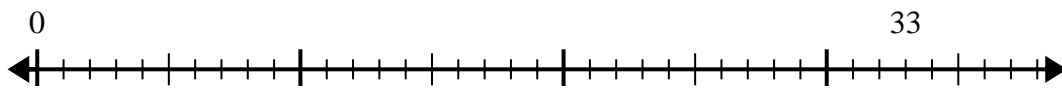
6) $45 \div 8 =$



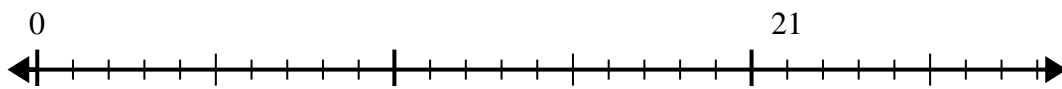
7) $25 \div 4 =$



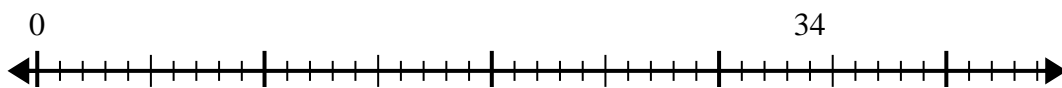
8) $33 \div 5 =$



9) $21 \div 4 =$



10) $34 \div 4 =$



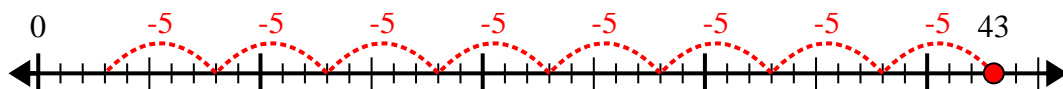
Answers

- 1. _____
- 2. _____
- 3. _____
- 4. _____
- 5. _____
- 6. _____
- 7. _____
- 8. _____
- 9. _____
- 10. _____

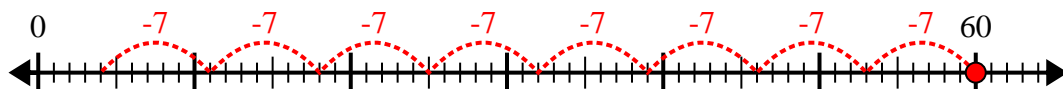


Use the number line to solve the division problem.

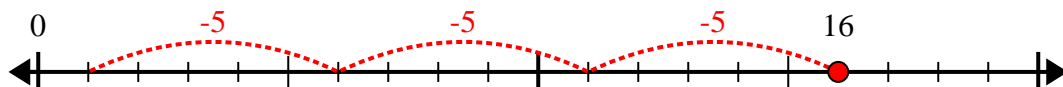
1) $43 \div 5 =$



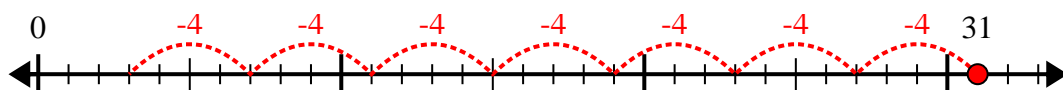
2) $60 \div 7 =$



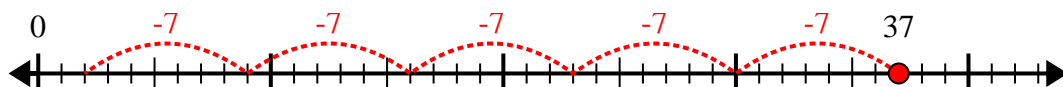
3) $16 \div 5 =$



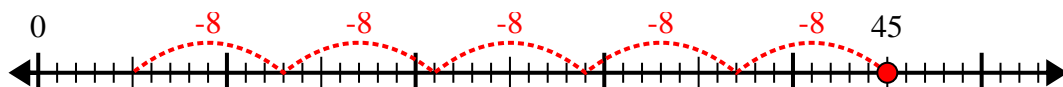
4) $31 \div 4 =$



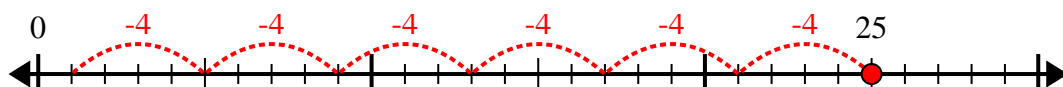
5) $37 \div 7 =$



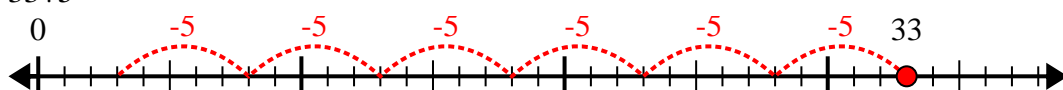
6) $45 \div 8 =$



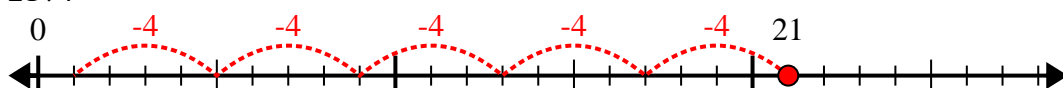
7) $25 \div 4 =$



8) $33 \div 5 =$



9) $21 \div 4 =$



10) $34 \div 4 =$



Answers

1. 8r3

2. 8r4

3. 3r1

4. 7r3

5. 5r2

6. 5r5

7. 6r1

8. 6r3

9. 5r1

10. 8r2